

Due: Friday, Feb 12<sup>th</sup>

Name: \_\_\_\_\_

1.OA.1

Solve the word problems. Make a picture that shows the story.

There were 9 birds flying. Four birds landed on a tree. How many birds are left?

Write a number sentence here. \_\_\_\_\_ = \_\_\_\_\_

**Subtract**


- 7 - 2 = \_\_\_\_\_
- 9 - 2 = \_\_\_\_\_
- 7 - 3 = \_\_\_\_\_
- 8 - 1 = \_\_\_\_\_
- 8 - 4 = \_\_\_\_\_
- 9 - 3 = \_\_\_\_\_

- 6 - 3 = \_\_\_\_\_
- 8 - 2 = \_\_\_\_\_
- 7 - 5 = \_\_\_\_\_
- 8 - 0 = \_\_\_\_\_
- 9 - 4 = \_\_\_\_\_
- 7 - 6 = \_\_\_\_\_



**Tuesday**

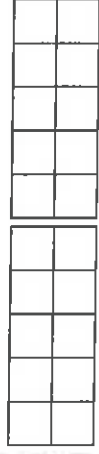
Complete the ten frames to make the numbers below.



$10 + 3 = 13$




$10 + 1 = \underline{\quad}$



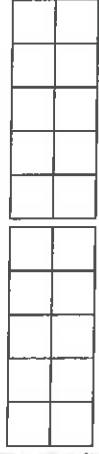
$10 + 10 = \underline{\quad}$



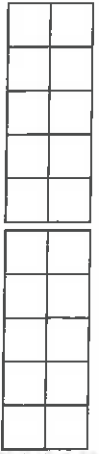
$10 + 7 = \underline{\quad}$



$10 + 5 = \underline{\quad}$



$10 + 0 = \underline{\quad}$

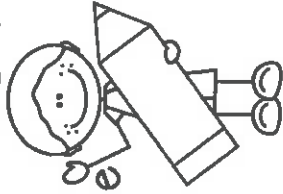


$10 + 4 = \underline{\quad}$

2<sup>nd</sup> Q.

Week 6

1.NBT.1





7:00



11:00



9:30




3:00



1:30




4:30




Match the analog clocks to the digital clocks that tell the same time.

Draw hands on the analog clock, then write the time on the digital clock.



:



:



Bubble the correct answer.

1. Which shape has 3 corners and 3 sides?

- a square
- b circle
- c triangle

2. Which shape has 4 corners and 4 sides?

- a square
- b circle
- c triangle

3. Which shape has 5 corners and 5 sides?

- a square
- b trapezoid
- c pentagon

4. Which shape has 6 corners and 6 sides?

- a hexagon
- b circle
- c pentagon

5. Which shape has 0 corners and 0 sides?

- a square
- b circle
- c rectangle

Name: \_\_\_\_\_ Date: \_\_\_\_\_



Little Bear ate 5 nuts. Papa bear ate 7 nuts and Mama Bear ate 6 nuts. How many nuts did they eat in all?

Sketch:

Ten Frames:


Number Path:

1	2	3	4	5	6	7	8	9	10	11	12	13	14	15	16	17	18	19	20
---	---	---	---	---	---	---	---	---	----	----	----	----	----	----	----	----	----	----	----

Equation:

Answer:

They ate \_\_\_\_\_ nuts in all.

Bonus: How many more nuts did Papa Bear eat than Little Bear? How many fewer nuts did Little Bear eat than Mama Bear?