


# Exploring Time




## Quick Review


➤ A clock with numbers and hands is an **analog clock**.



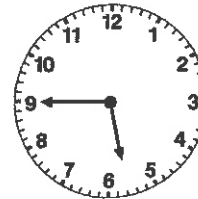
5 o'clock  
5:00



quarter after 5  
5:15




half past 5  
5:30



quarter to 6  
5:45

➤ A clock with numbers and no hands is a **digital clock**.

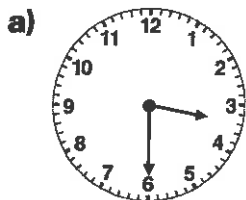


The clock shows 45 minutes after 10 o'clock.

We say: "Ten forty-five."

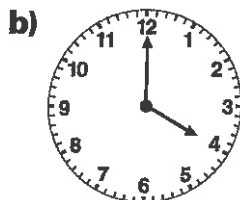
## Try These

1. Write each time two different ways.



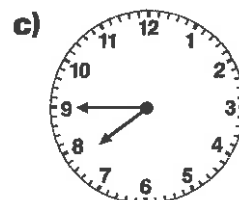
\_\_\_\_\_

\_\_\_\_\_



\_\_\_\_\_

\_\_\_\_\_



\_\_\_\_\_

\_\_\_\_\_

2. Write each time in a different way.

a) 2:00 \_\_\_\_\_

b) quarter after 9 \_\_\_\_\_


c) 8:30 \_\_\_\_\_

d) twelve forty-five \_\_\_\_\_


## Practice

1. Write each time two different ways.

a)



b)



c)



\_\_\_\_\_

\_\_\_\_\_

\_\_\_\_\_

\_\_\_\_\_

2. Skip count to find how many minutes are between each pair of times.

a) 6:15 and 6:20 \_\_\_\_\_


b) 8:10 and 8:40 \_\_\_\_\_

c) 2:40 and 2:55 \_\_\_\_\_

d) 12:00 and 12:30 \_\_\_\_\_

3. Read the time on the analog clock.

Write the same time on the digital clock.



4. What is another way you could write twenty-five to seven?

\_\_\_\_\_

## Stretch Your Thinking

Lester left the library at 20 minutes before 5:00.

Show the time on the digital clock.

