

Name: _____
I.OA.1
Solve the word problems.
Make a picture that shows
the story.

Monday

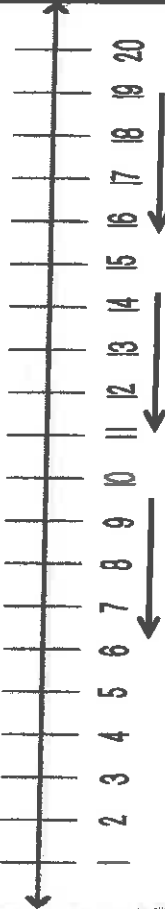
There were 5 dishes in the sink. After lunch we put 7 more dishes in the sink. How many dishes are there in the sink now?

Write a number sentence here. \longrightarrow _____

There were 12 towels in the laundry room. We put 5 towels away. How many towels are still in the laundry room?

Write a number sentence here. \longleftarrow _____

Tuesday



Move this way to count backwards.
10, _____, 6 15, _____, 5

8, _____, 4 40, _____, 30

Skip count backwards by two and by five.

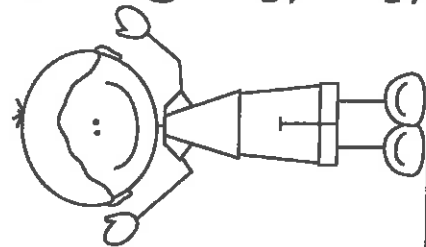
14, _____, 10 35, _____, 45
20, _____, 16 20, _____, 10

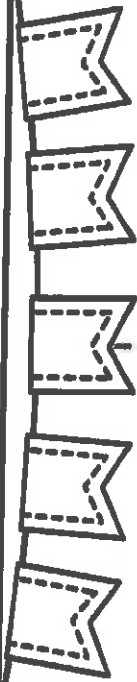
12, _____, 8 45, _____, 35

18, _____, 14 60, _____, 50

22, _____, 18 55, _____, 45


16, _____, 12 50, _____, 40









Favorite Colors


Color	Votes
red	
green	
yellow	



Complete the chart.

Word Box

Circle	Square	Hexagon	rectangle	triangle
Shape				
Name of the shape				
Number of corners				
Number of Sides				



Use the table to answer the questions.

1. How many people voted for red? _____
2. How many people voted for green? _____
3. How many people voted for yellow? _____
4. What color got the most votes? _____
5. What color got the least votes? _____