

Name: _____

I.O.A. |

Solve the word problems.

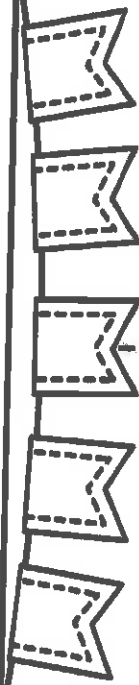
Make a picture that shows the story.

My mom put 10 bananas on the kitchen table. We ate 4 bananas. How many bananas were left on the table?

Write a number sentence here. \longrightarrow _____ = _____

I had 7 crayons in my pencil box. My brother took some away and put them in his pencil box. I only have 4 crayons left. How many crayons did my brother take?

Write a number sentence here. \longrightarrow _____ = _____




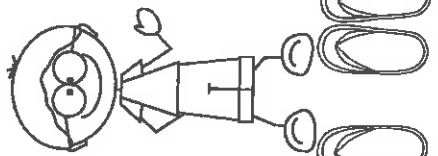


Monday

Tuesday




Week 7
I.N.B.T. |

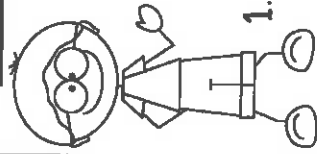
Look at the pictures. Skip count by 2s or by 5s.






Favorite Animals

Animal	Votes
cow	
pig	
horse	



Use the table to answer the questions.

1. How many people voted for horses? _____
2. How many people voted for pigs? _____
3. How many people voted for cows? _____
4. What animal got the most votes? _____
5. What animal got the least votes? _____



Draw each shape in the box.

circle

rectangle

square

triangle

hexagon