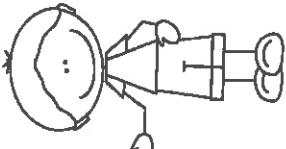


Name: _____
1.OA.1

Week 3
1.NBT.1

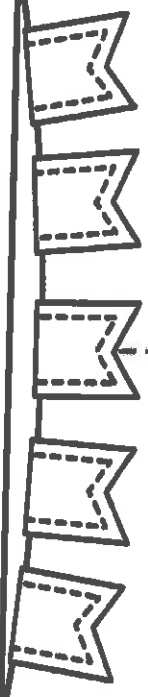


Tuesday


Write the missing numbers on the hundreds chart below.

	2		4		6	7	9	10
	12	13	14		16		18	20
21			24	25		27		
	32	33	34			37	38	40
		43			46		49	50

What number comes after 30? _____
What number comes before 41? _____



Monday



What parts make 6 and 7?
Look at the dominoes and show each part.

4 and 2 make 6

and make

and make

4 and 3 make 7

and make

and make

and make

and make

and make

I.MD.1

Wednesday

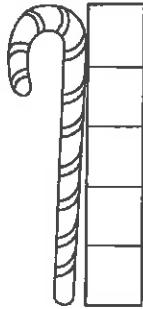
How long is the crayon?



□ □ □ □ □

The crayon is ___ blocks long.

How long is the candy cane?



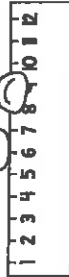

The candy cane is ___ blocks long.

How long is the leaf?



□ □ □ □ □

The leaf is ___ blocks long.

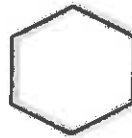

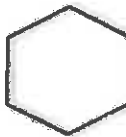






Week 3 | G.1

Thursday



Color the rectangles and the circles.



Name: _____

Spelling Numbers

Say the number, trace the number word and then write it.

0

zero

1

one

2

two

3

three

4

four

5

five