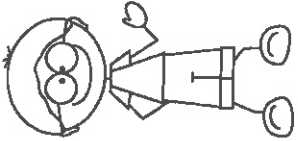
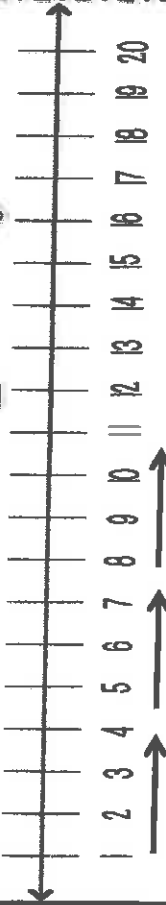


Name: _____
IOA.1



Count on to find the sums. Use the number line.



Move this way to count on.



$5 + 1 = \underline{\quad}$

$6 + 2 = \underline{\quad}$

$8 + 1 = \underline{\quad}$

$3 + 1 = \underline{\quad}$

$11 + 2 = \underline{\quad}$

$9 + 2 = \underline{\quad}$

$4 + 2 = \underline{\quad}$

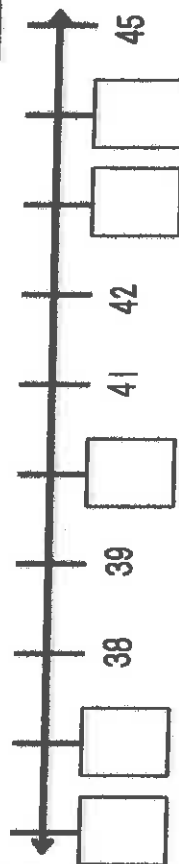
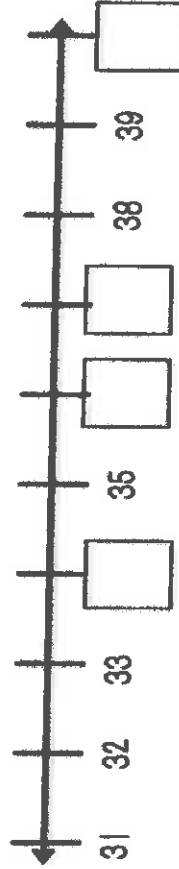
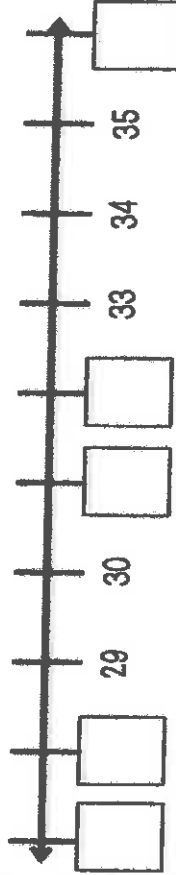
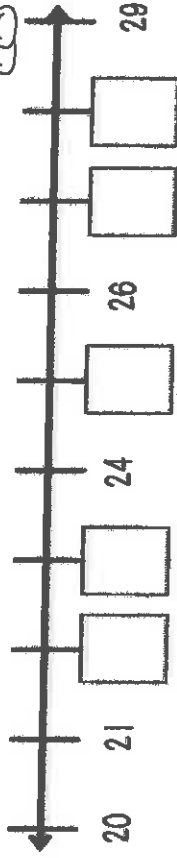
$13 + 1 = \underline{\quad}$

$7 + 1 = \underline{\quad}$

$15 + 2 = \underline{\quad}$

Tuesday


Write the missing numbers on the number lines below.



What number is between 24 and 26? _____

What number is between 42 and 44? _____

Week 4
I.NBT.1



I.MD.1


Wednesday

How long is the pencil?



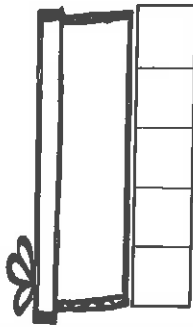
The pencil is _____ blocks long.

How long is the lady bug?



The lady bug is _____ blocks long.

How long is the box?



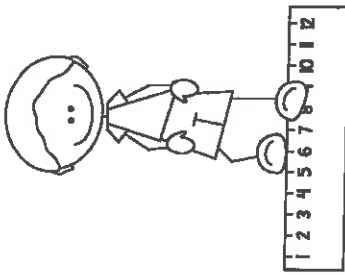


The box is _____ blocks long.

Week 4 IG.1

Thursday



Color the hexagons and triangles.



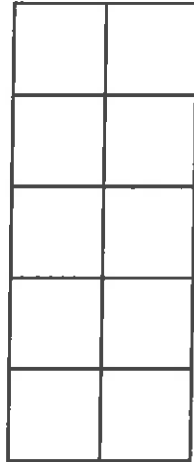
Name: _____

Date _____

I can use a number line.



I can use a ten frame.



I can write a number sentence.

$$\underline{\quad} + \underline{\quad} = \underline{\quad}$$

I can use tally marks.

**There are 2 turtles.
4 more come. How
many turtles in all?**



I can use a picture.

I can explain my thinking.
