

Name: _____
1.OA.1

Week 1
1.NBT.1



Monday

Look at the dots on each domino. Then, write how many dots there are in all.

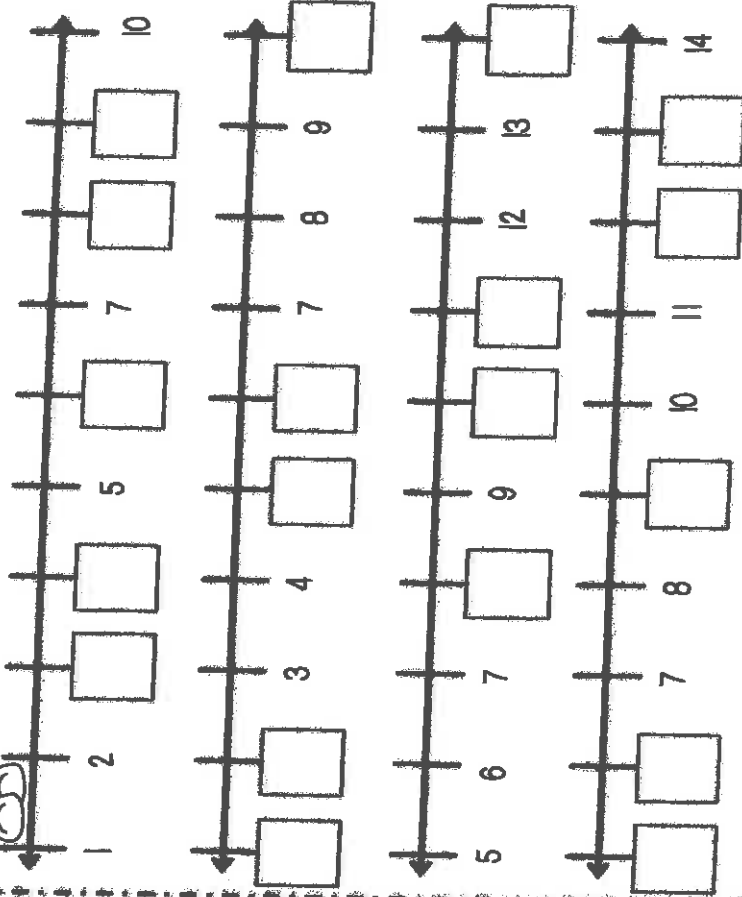
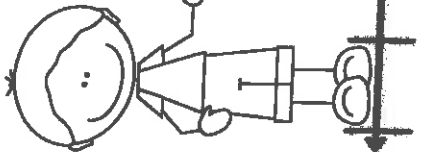
Three dominoes are shown in a box. The first domino has 3 dots on the left and 2 dots on the right. The number '5' is written on a line next to it with an arrow pointing to the total dots. Below are two more dominoes for counting: one with 4 dots on the left and 1 dot on the right, and another with 2 dots on the left and 3 dots on the right.

Three dominoes are shown in a box for counting: one with 3 dots on the left and 2 dots on the right, one with 1 dot on the left and 2 dots on the right, and one with 4 dots on the left and 3 dots on the right.

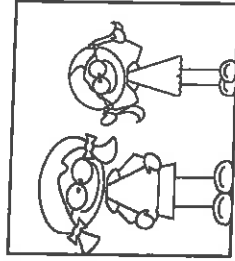


Three dominoes are shown in a box for counting: one with 2 dots on the left and 3 dots on the right, one with 3 dots on the left and 4 dots on the right, and one with 1 dot on the left and 1 dot on the right.

Tuesday

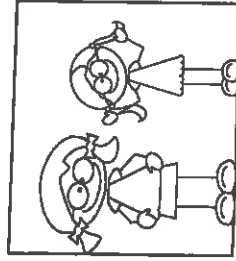


Write the missing numbers on the number lines below.



1. Circle the child that is taller in each box.



2. Circle the child that is shorter in each box.




3. Is penguin 1 shorter or taller than penguin 2?



Penguin 1 is _____ than penguin 2.





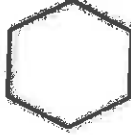






4. Is penguin 2 shorter or taller than penguin 1?



Penguin 2 is _____ than penguin 1.



Color the triangles and squares.



Name _____



Count by 2's



Directions: Skip count by 2's and write the missing numbers on the acorns.

